



Favourite Fruit



 Banana

 Orange

 Pear

 Apple

 Plum

Tick the statements which you agree with.

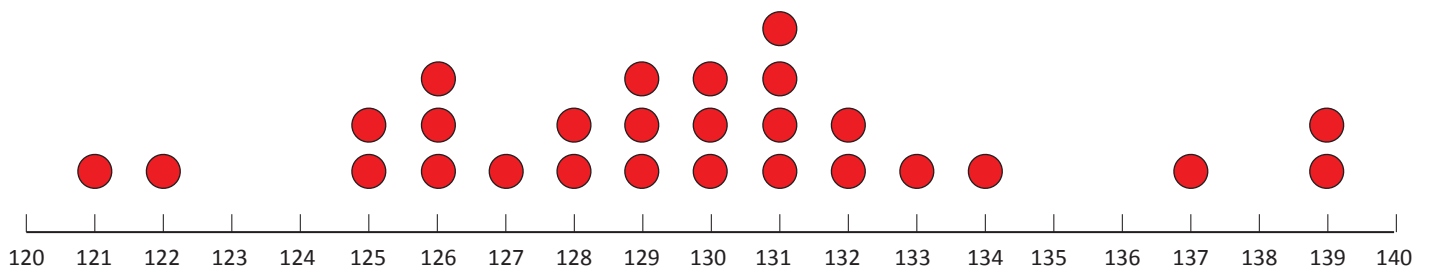
- 3 people picked pears.
- 2 more people picked bananas than picked apples.
- Plums are more popular than oranges.
- 4 people picked oranges.
- Oranges are the second most popular fruit.

Write 2 of your own statements about this graph.

1.

2.

Height of Children in Room 6



Tick the statements which you agree with.

- 3 people are 126 centimetres tall.
- The shortest person in Room 6 is 121 centimetres tall.
- The tallest person is 131 centimetres tall.
- 127 centimetres is tall in this class.
- 3 people are over 135 centimetres tall.

Write 2 of your own statements about this graph.

1.

2.