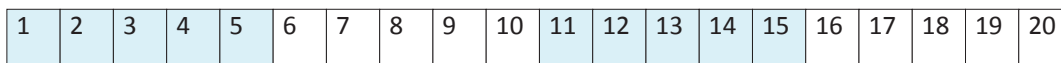
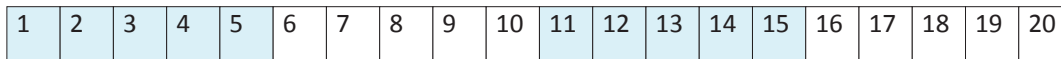


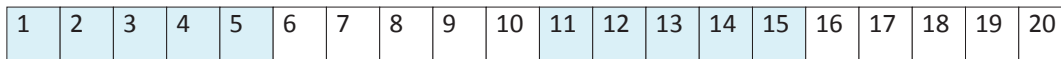
Show your jumps on the number line for:



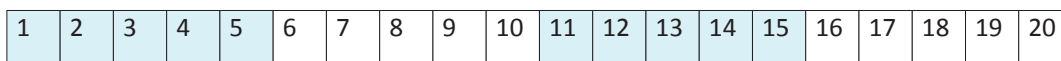
$13 + 5 = \square$



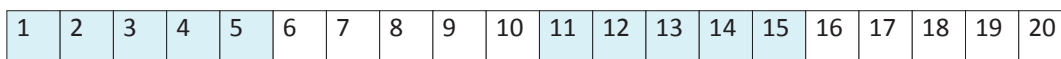
$9 + 7 = \square$



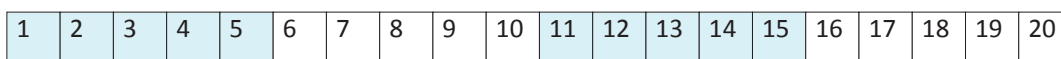
$10 + 5 = \square$



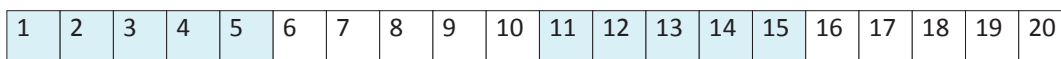
$11 + 9 = \square$



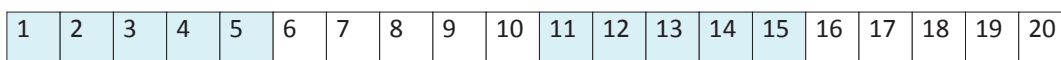
$\square + 7 = 15$



$\square + 8 = 15$



$8 + \square = 14$



$8 + \square = 11$