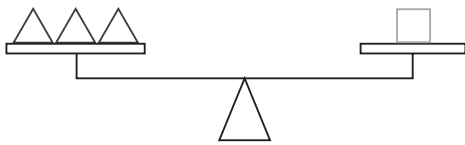


1.



a. He aha te tuinga poto hei whakaatu i tēnei whārite?

e. Whakaotia ēnei whārite:

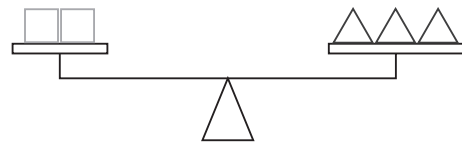
$2 \square =$

$6 \square =$

$9 \triangle =$

$4 \triangle =$

2.



a. He aha te tuinga poto hei whakaatu i tēnei whārite?

e. Whakaotia ēnei whārite:

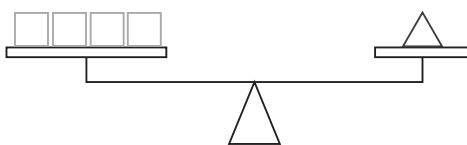
$3 \square =$

$20 \square =$

$9 \triangle =$

$4 \triangle =$

3.



a. He aha te tuinga poto hei whakaatu i tēnei whārite?

e. Whakaotia ēnei whārite:

$2 \square =$

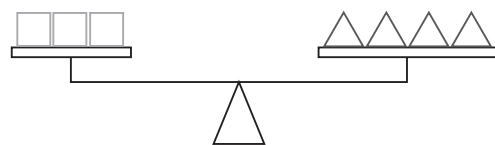
$6 \square =$

$\square =$

$5 \triangle =$

$99 \triangle =$

4.



a. He aha te tuinga poto hei whakaatu i tēnei whārite?

e. Whakaotia ēnei whārite:

$6 \triangle =$

$6 \square =$

$100 \triangle =$

$60 \square =$