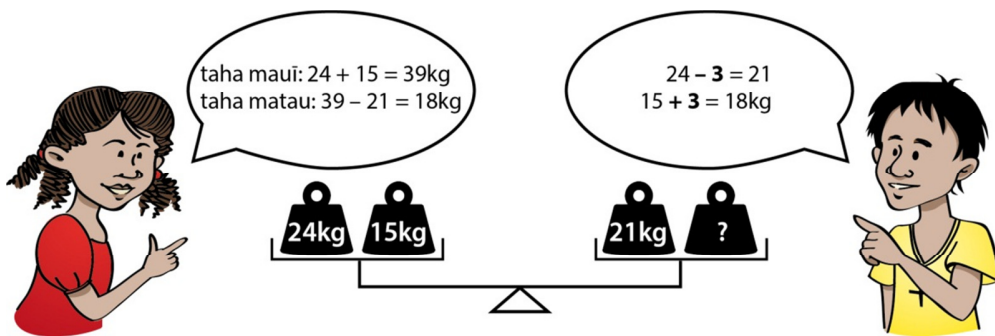


Ihumanea Pāngarau  
Te Tohu Ōrite  
MĀ TE ĀKONGA

E rua ngā maihea e noho ana ki ia taha o te pūrere taurite nei. Kei te whiriwhiri a Hine rāua ko Tama i te taumaha o tētahi:



1. Whakamāramahia te rautaki a Hine.
2. Whakamāramatia te rautaki a Tama.
3. Koia nei te tuinga poto hei whakaatu i te rautaki a Tama:

$$24 + 15 = 21 + 18$$

$\overset{-3}{\curvearrowright}$        $\overset{+3}{\curvearrowleft}$

Whakamahia te rautaki a Tama hei whiriwhiri i te tau e ngaro ana i ēnei whārite:

- a)  $98 + 74 = \square + 72$                       e)  $48 + 37 = 38 + \square$   
 h)  $58 + 29 = \square + 27$                       i)  $56 + 98 = 54 + \square$

4. Tuhia ētahi otinga rerekē e toru mō ia whārite:

- a)  $76 + \square = 73 + \square$                       e)  $154 + \square = \square + 159$

5. I tēnei whakaahua, e tohu ana te  $h$  i tētahi tau.



Koia nei ētahi whārite e rua e hāngai ana ki te whakaahua kei runga ake nei:

$$h + 5 = 32$$


$$32 - 5 = h$$

a) Ko tēhea te whārite e pai ana hei whiriwhiri i te  $h$ ?


e) He aha te tau e rite ana ki te  $h$ ?

6. Tuhia he whārite hei whiriwhiri i te tau e hāngai ana ki te pū i ēnei whakaahua:


a)



e)



h)



i)

