




# Te Mātakitaki Hākinakina

E whai ake nei ētahi taurira pātai me ētahi taurira tohutohu mō te pāngarau me te hākinakina. Koirā pea hei fīmatatanga whakawhiti kōrero mā kōrua ko tō tamaiti.

Here are some possible pāngarau questions or instructions about sport that might start conversations between you and your child.

Te Hanga Pukapuka Pitopito Kōrero	Keeping a Scrapbook
Tuhia te kēmutaka o ngā Mystiks ki tō pukapuka, me tētahi wāhi hei tuhi i ngā tapeke o ngā kēmu.	Write the draw for the Mystics and leave a space to write in the results.
Me pēhea te whakaatu i ēnā kōrero ki te tūtohi?	How can we show that kōrero in a table?
Tuhia ngā kaitākaro me te tāroaroa o tēnā me tēnā.	Write down all of the players and their heights.
E hia te pakeke o Temepara? Mēnā 18 tau tōna pakeke i te wā i fīmata ai tana tākaro i tēnei taumata, e hia tau ia e tākaro ana?	How old is Temepara? If she was 18 when she started playing at this level, how many years has she been playing for?
Ko te kōrero mō Latu, te kaikuru ūhanga o te fīma, ka eke ki te 95% tana ōrau ūhanga. He aha te tikanga o tērā?	The stats for Latu, the teams goal shoot says that her goal percentage is 95%. What does that mean?
Whakatairitea te ōrau ūhanga o ngā kaikuru ūhanga o ngā fīma katoa. Ko wai te mea autaiā rawa atu?	Compare the shooting statistics of the goal shooters of all of the teams. Who is the most successful?
Tirohia ngā kēmu kāinga o ngā Mystiks me ngā kēmu ki tawhiti. He ōrite, he rerekē rānei te ōrau o ngā kēmu toa?	Have a look at their home games and their away games. Is the percentage of wins the same or different?





Te Taumāhekeheke o te Ao	Olympic Games
Ko te 21.24m te panga matā tawhiti rawa atu o Valerie Adams, ko te 22.63 te rekoata o te ao. E hia mita atu anō kia riro i a Valerie te rekoata.	Valerie Adams best shot put is 21.24 metres, and the world record is 22.63. How much further before Valerie attains the world record?
E hia hākona kei waenganui i te toa me te kaiomaoma whakamutunga? Me pēhea te whiriwhiri?	How many seconds between the first place and last place. How can we work it out?
He aha te tikanga o te tuhinga 3:31.79, te wā i oti i a Nick Willis te 1500m?	What does the way of writing Nick Willis' time for the 1500m mean: 3:31.79?
Whakaawhiwhia te wā o Nick Willis mō te 1500m ki te 3 me te haurua meneti. E hia te wā e hāngai ana ki ia 100m o te omaoma?	Round Nick Willis' time for the 1500m to 3 and a half minutes. How long for every 100m does that correspond to?
Tirohia te tere o ngā kaihoe waka me te tere o ngā kaiomaoma. He tere ake a wai i a wai?	Look at the speed of the rowers and the speed of the runners. Who is faster than who?
E hia ngā amionga o te papa omaoma e oti ai te 10,000km?	How many laps of the running track to complete the 10,000m race?



# Te Mātakitaki Hākinakina

Ngā Whiwhinga me ngā Tapeke	Points and Totals
Kotahi te piro e 5 te whiwhinga, e 2 ngā piro 10 te whiwhinga, e 3 ngā piro 15 te whiwhinga ...	One try you get 5 points, 2 tries 10 points, 3 tries 15 points ...
E hia ngā whana hāmene e ōrite ana ki ngā piro e 3?	How many penalty kicks are equal to 3 tries?
Mēnā i tutuki i a ia ngā whana piro me ngā whana hāmene katoa o te kēmu, ka toa rātou?	If he had of got all the conversions and penalty kicks would they have won?
Pēhea ō whakaaro mō te pūnaha whiwhinga mō te Super 15?	What do you think of the points system for the Spuer 15?
E hia atu anō ngā omaoma i ngā paipea whakamutunga e rua, kia toa ai a Aotearoa?	How many more runs do we need from the last two overs for Aotearoa to triumph?
He aha te tikanga o te pāpātanga omanga?	What does the run rate mean?
He aha ngā kōrero e whakaaaturia ana ki tēnā kauwhata mō ngā omanga o ia paipea?	What does that graph about runs per over tell us?



Te Hahau Pōro Papa Iti	Mini Golf
Me pēhea te whiriwhiri i te tapeke?	How can we work out the totals?
Tāpiria ngā whā katoa i te tuatahi.	Add up all the fours first.
Tatauria mawhiti-rima ngā rima katoa.	Skip count in fives all the fives.
E hia te iti ake o te whiwhinga a Rāwiri i te whiwhinga a Haare?	How much smaller is Rāwiri's total than Haare's?
Mēnā, ko te 4 te toharite mō ia rua, e hia te tapeke?	If the average is 4 per hole, what would the total be?
He aha te tapeke e whai nā koe? E hia tēnā mō ia rua?	What total are you aiming for. How much is that per hole?