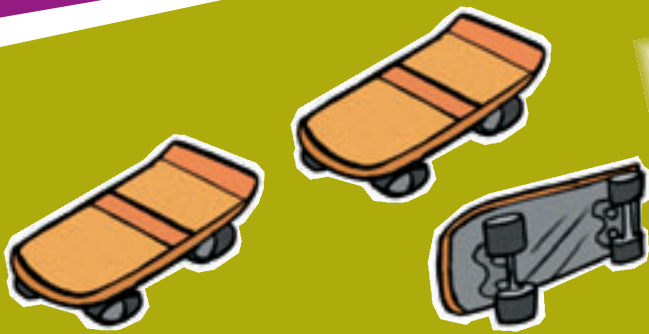



Multiplying Madness

You need counters or beads a classmate


Activity

1. a. Here are three scooters.
How many wheels are there?
- b. How many wheels are on six scooters?



2. a. Here are three skateboards.
How many wheels are there?
- b. How many wheels are on six skateboards?

3. a. Here are four triangles.
How many corners are there?
- b. How many corners are on eight triangles?
- c. How many corners are on seven triangles?



4. a. Here are four wētā.
How many legs are there?
- b. How many legs are on eight wētā?
- c. How many legs are on seven wētā?



5. Discuss with a classmate how you worked out your answers.
Can you find other ways to work out the answers?