

Mind Boggle


You need attribute blocks a photocopy of the table

Activity One


Amy, Priya, and Ralph have each taken a different attribute block from the set.

On the photocopy of the table below, work out which block each person has. Use the clues on the table as well as the following clues:


1. Each person's block is a different colour and shape from the others.



2. The shape and colour of Ralph's block start with the same letter as his name.



4. Amy's block has two more sides than Priya's block.



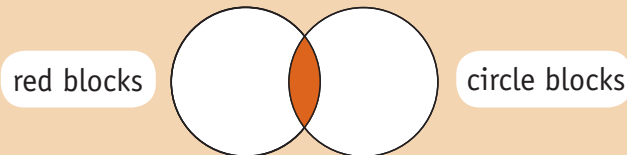
3. Priya's block is thicker and bigger than Amy's and Ralph's blocks.

5. Priya's block is not blue.

	Red	Yellow	Blue						Thin	Thick	Small	Big
Amy												
Priya												
Ralph												

Activity Two

Red circular blocks go in the coloured part of this diagram.



What blocks go in the numbered parts of this diagram?

