

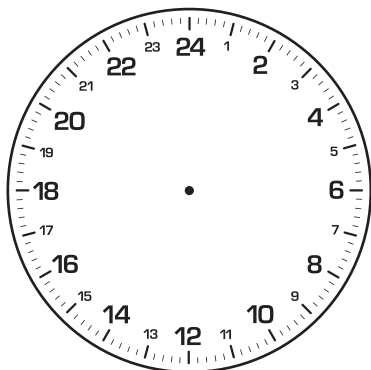
1. Here are four boarding passes for international passengers leaving ex-Auckland. Put the passengers in order of departure. Write the am or pm time for each person's departure.



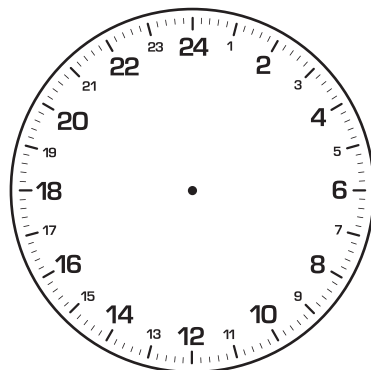
2. Zac's flight gets delayed by 120 minutes. Does he still leave before Lynley?



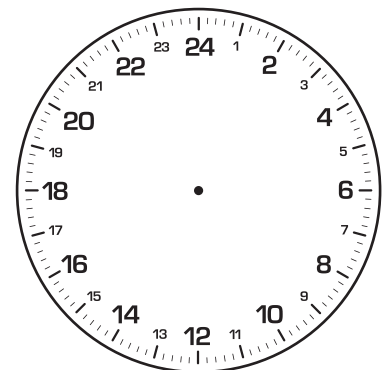
3. In the city of Split, in Croatia, you will find an ancient 24-hour clock. It is part of the Town Hall built in the 15th century. Below are some new 24-hour clock faces. Draw hands on the clocks to show how the standard times would be shown.



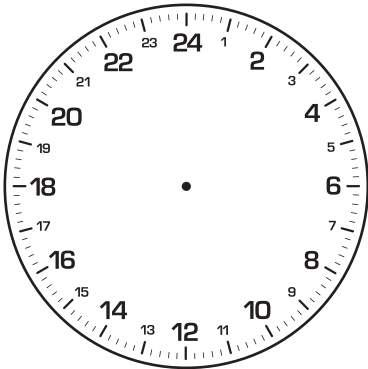
5:28am



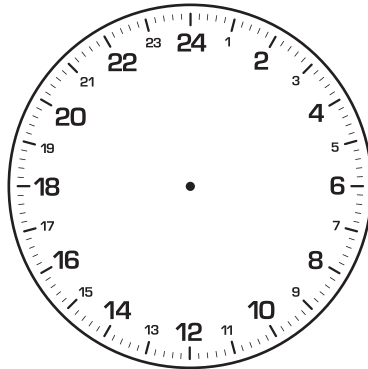
3:05pm



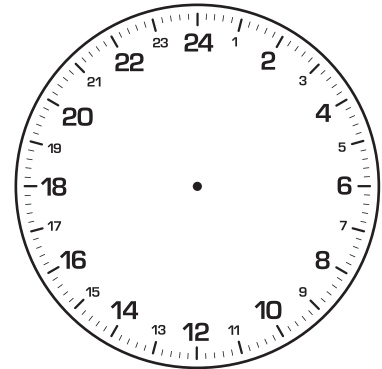
11:50am



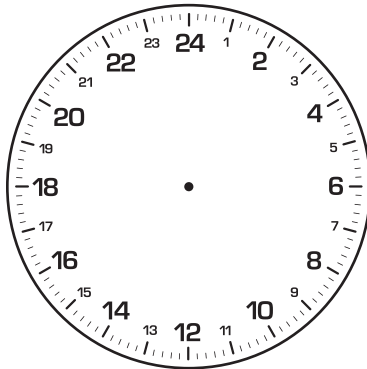
12:00 noon



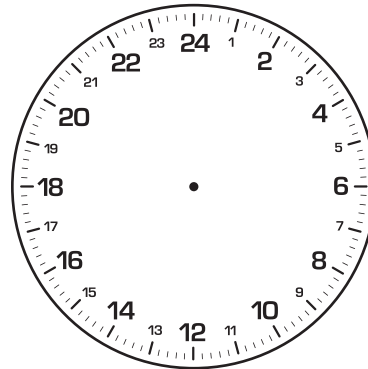
10.35pm



7:10am



12:25 pm



12.10am

- 
4. New Zealand, like most former British colonies, uses 12-hour am and pm time. Is that true of other countries in the world? Use the internet to find out which countries use 24-hour time. List ten of these countries.
- 
5. A shop is open from 7:30am to 6:00pm on weekdays. How would the opening hours be written in 24-hour time? Is 24-hour time or 12-hour time a clearer way to show the opening times?
- 
6. A person in New Zealand is trying to buy a house in France. The contract must set a final settlement date and time. The New Zealand lawyer writes 12:30 on Friday, 16 May on the contract. The lawyer in Paris is confused. Why might that be?
-